

4 x 4 square puzzle

Written by Liz Gibbs

The Busy Lizzie Maths Library

















4 x 4 square puzzle

What number should replace the question mark in this puzzle?

Where are you going to start?

















What is each shape worth?

Can you convince a friend?

				
				?
				
				18
	16	19		

4 x 4 square puzzle

What number should replace the question mark in this puzzle?

				
				17
				
				18
	16	19		