
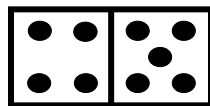
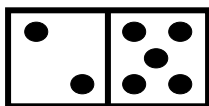
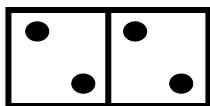
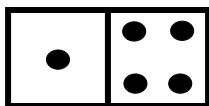


# Multiplication domino squares (2)

Written by Liz Gibbs

*The Busy Lizzie Maths Library*


Can you solve this multiplication domino problem square?  
All sides must total 20.



Answer

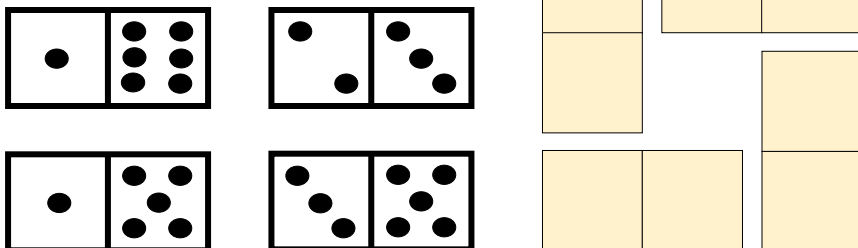
Can you solve this multiplication domino problem square?

All sides must total 20.



Can you solve this multiplication domino problem square?

All sides must total 30.



Answer

Can you solve this multiplication domino problem square?

All sides must total 30.

