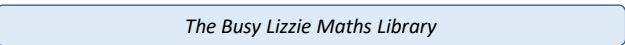


Domino addition square


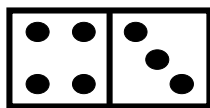
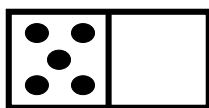
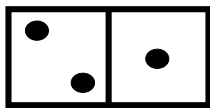
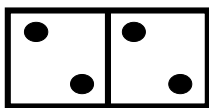
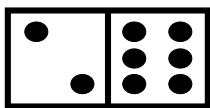
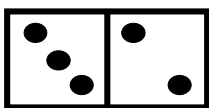
Written by Liz Gibbs

The Busy Lizzie Maths Library



The total of each column and row is 12.

Can you make the columns and rows total 12 by using these dominoes?



Solution

The total of each column and row is 12.

Can you make the columns and rows total 12 by using these dominoes?

