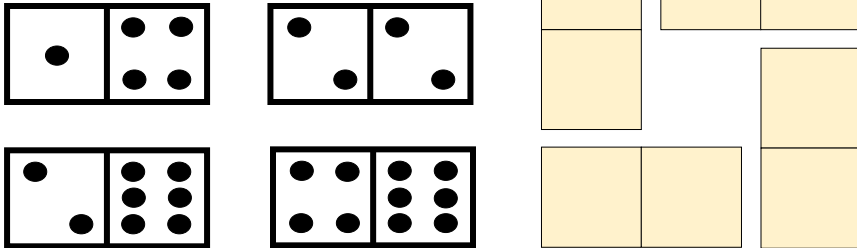


Multiplication domino squares

Written by Liz Gibbs

The Busy Lizzie Maths Library


Can you solve this multiplication domino problem square?
All sides must total 24.



Answer

Can you solve this multiplication domino problem square?

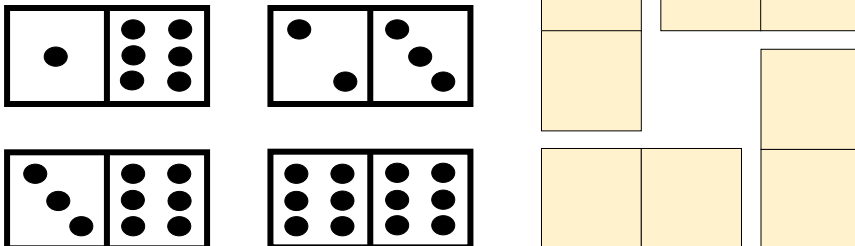
All sides must total 24.



© www.thebusylizzie.co.uk 2020

Can you solve this multiplication domino problem square?

All sides must total 36.



© www.thebusylizzie.co.uk 2020

Answer

Can you solve this multiplication domino problem square?

All sides must total 36.

