

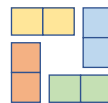
Domino challenge

Written by Liz Gibbs

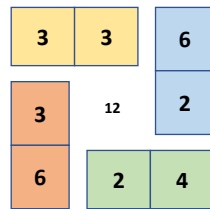
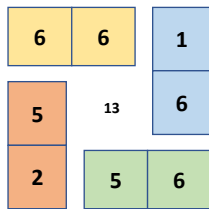
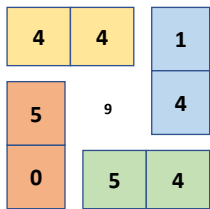
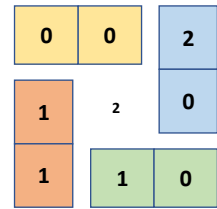
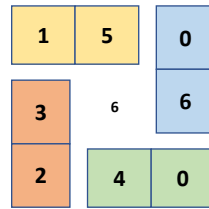
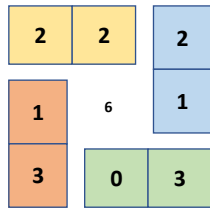
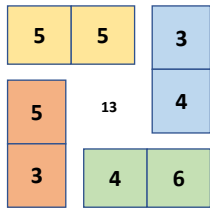
The Busy Lizzie Maths Library

Domino challenge

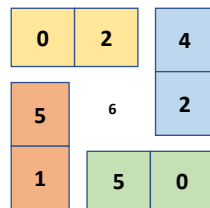
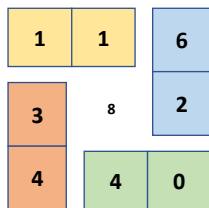
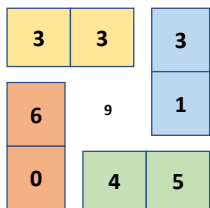
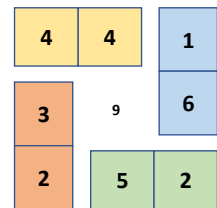
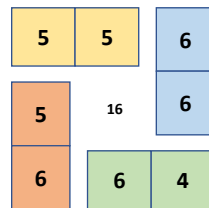
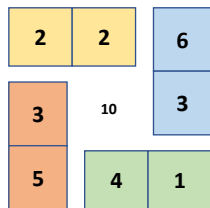
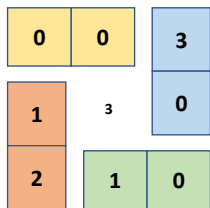
- Can you make this arrangement of dominoes?



- Can you make 7 arrangements, using the whole set of 28 dominoes.
- All four sides of each arrangement must have the same total.
- Can you complete the domino challenge?



Here is a possible solution, using numerals rather than spots.



Here is a possible solution, using numerals rather than spots.