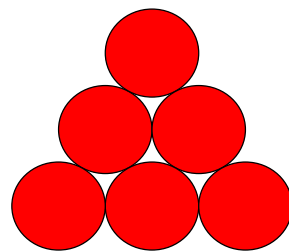


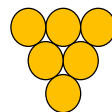
Six counters

The Busy Lizzie Maths Library



Here are six counters in a triangle arrangement.

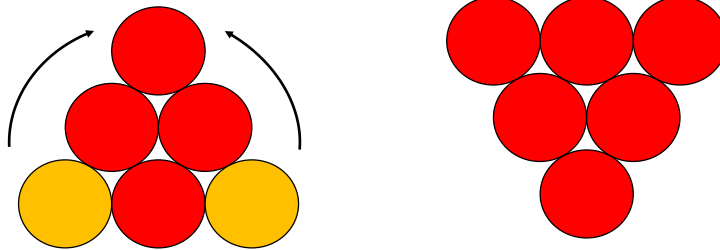
Can you make the arrangement look like this by only moving two counters?



solution

Six counters

Solution:



Move the two lower counters to the top, as shown.