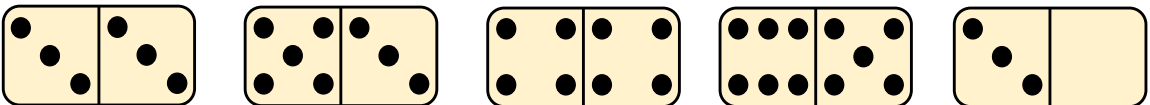


Domino line up

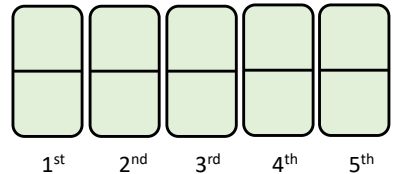
Written by Liz Gibbs

The Busy Lizzie Maths Library

You will need these dominoes, some clues and a pencil and paper.



Can you put the dominoes in this order using these clues?



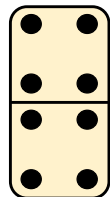
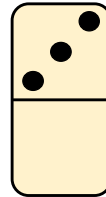
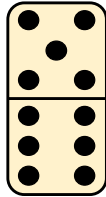
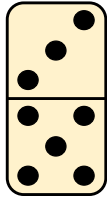
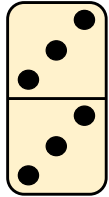
Clue 1: The domino with a difference of 1 is in the middle of the line.

Clue 2: The double dominoes are the first and last dominoes.

Clue 3: The domino with a blank half goes between the odd numbered domino and double 4.

Clue 4: The domino with 8 spots follows the domino with 2 fewer spots.

Answer



Clue 1: The domino with a difference of 1 is in the middle of the line.

Clue 2: The double dominoes are the first and last dominoes.

Clue 3: The domino with a blank half goes between the odd numbered domino and double 4.

Clue 4: The domino with 8 spots follows the domino with 2 fewer spots.