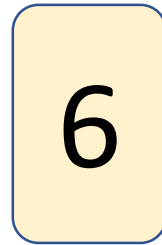
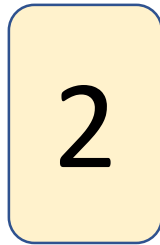


Digit cards: Greater than 500

Digit cards: Greater than 500




Here are some digit cards



Write all the three-digit numbers, greater than 500, that can be made with these cards.

Digit cards: Greater than 500

Here are some digit cards



Write all the three-digit numbers, greater than 500, that can be made with these cards.


664 662 646 642

Digit cards: Greater than 500

Increase the number of digit cards from four to five cards.

How many possibilities are there now?

What would happen if the value of the fifth digit card was less than 5?



Would I have more or fewer possibilities than if the digit card had a value greater than 5?

